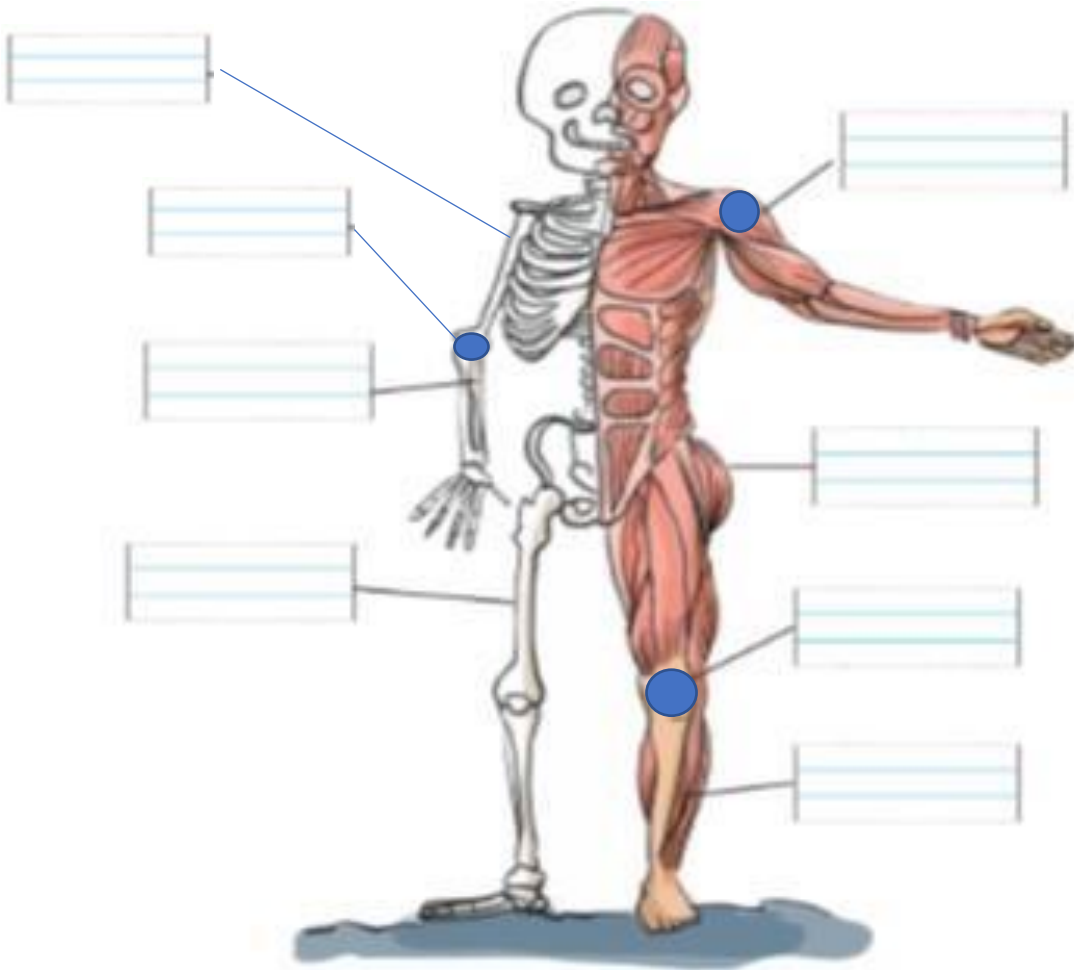


NATURAL SCIENCE. UNIT 1
WORKSHEET 1

1. Write the parts of the body:



2. Answer the questions:

How many femurs have you got?

What is the longest bone in your body?

NATURAL SCIENCE. UNIT 1

WORKSHEET 2

1. Match

1. It joins the ulna with the hand
2. It joins the femur with the tibia
3. It joins the foot with the leg
4. It is the longest bone in your body
5. It is the muscle we have in the arm

wrist

biceps

knee

femur

ankle

2. *What are the three parts of the body?*



NATURAL SCIENCE. UNIT 1
WORKSHEET 3

1. Write true or false and correct the false sentences.

The humerus is in the arm

The ulna is in the leg


Joints are where muscles connect

Bones in our body are called skeleton

The joint between femur and tibia is the ankle

NATURAL SCIENCE. UNIT 1
WORKSHEET 4

1. Draw a picture of your body and label the main bones, joints and muscles.



NATURAL SCIENCE. UNIT 1

WORKSHEET 5

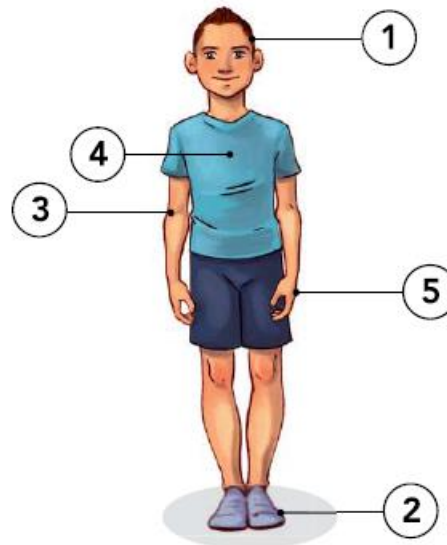
1. Match:



children	teenagers	adults	elderly
----------	-----------	--------	---------

2. Is the label correct? Write Yes (Y) or No (N):

1 head	<input type="checkbox"/>
2 abdomen	<input type="checkbox"/>
3 leg	<input type="checkbox"/>
4 chest	<input type="checkbox"/>
5 hand	<input type="checkbox"/>



3. Match

- | | |
|---------------|--|
| 1 childhood | Begins at about seventy. |
| 2 adolescence | The first eleven or twelve years of life. |
| 3 adulthood | From about twenty until seventy. |
| 4 old age | From eleven or twelve until we are twenty. |