

# What Time Is It?

Look at the clocks and write the time below.




Example: It's half past five

\_\_\_\_\_

\_\_\_\_\_

\_\_\_\_\_



\_\_\_\_\_

\_\_\_\_\_

\_\_\_\_\_

\_\_\_\_\_

\_\_\_\_\_

\_\_\_\_\_



\_\_\_\_\_

\_\_\_\_\_

\_\_\_\_\_

\_\_\_\_\_

\_\_\_\_\_

\_\_\_\_\_



\_\_\_\_\_

\_\_\_\_\_

\_\_\_\_\_

\_\_\_\_\_

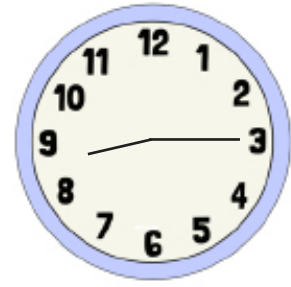
\_\_\_\_\_

\_\_\_\_\_

# What Time Is It? Respuestas



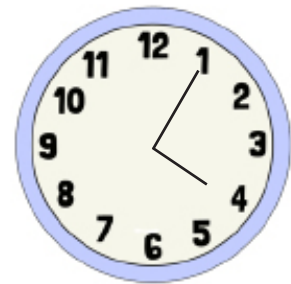
Example: It's half past five



It's quarter past eight



It's quarter to nine



It's five past four



It's two o'clock



It's ten past three



It's twenty past eight



It's half past eleven