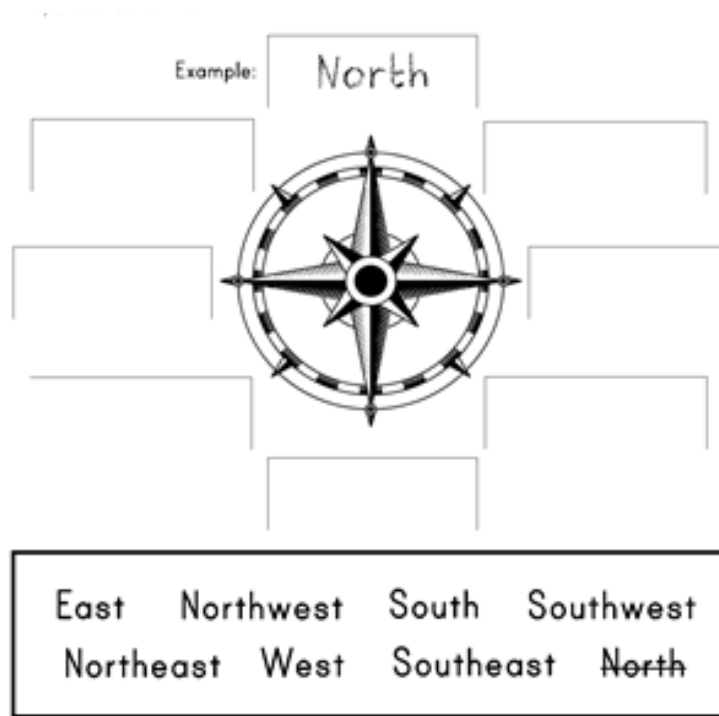


1. Label the compass with the cardinal points:



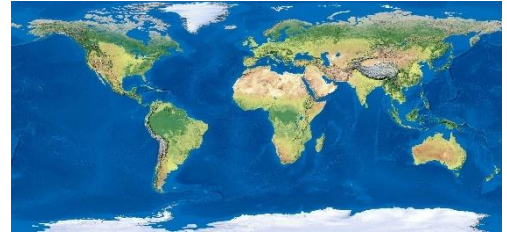
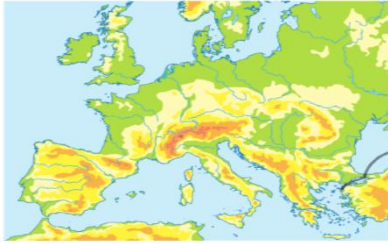
2. Answer to the questions:

North, South, East and West	key	Compass rose
-----------------------------	-----	--------------

- Which part of a map do you use if you want to find out the meaning of the symbols? \_\_\_\_\_.
- Which part of a map do you use to know the orientation of the map? \_\_\_\_\_.
- What are the four cardinal points?  
\_\_\_\_\_

3. Look at the maps and label:

WORLD MAP	PHYSICAL MAP	POLITICAL MAP
-----------	--------------	---------------



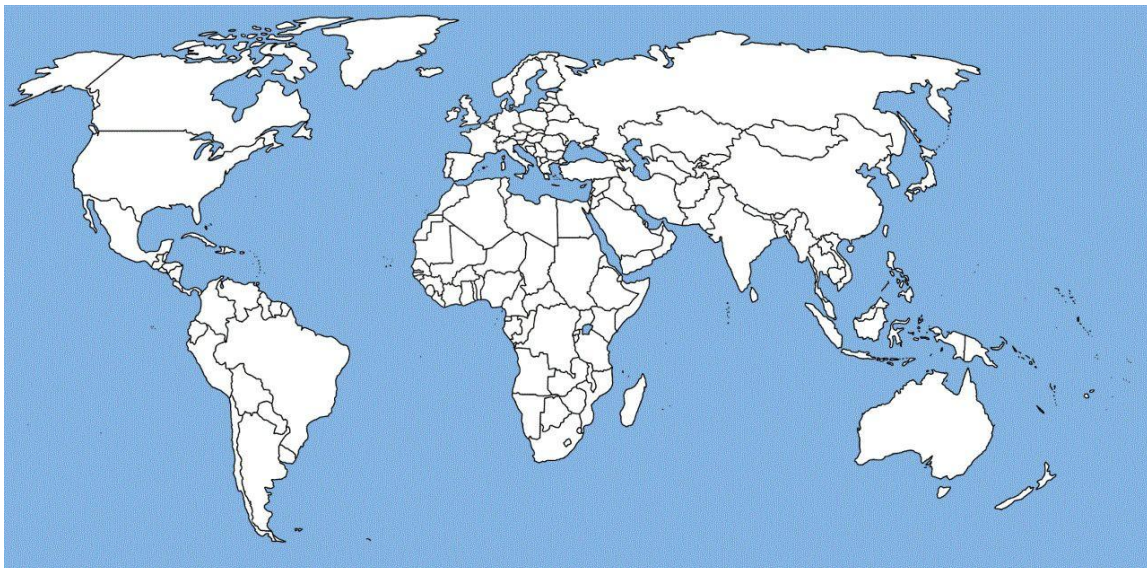
1. A \_\_\_\_\_ shows natural features like rivers, mountains or lakes.
2. A \_\_\_\_\_ shows borders, Autonomous communities or regions.
3. A \_\_\_\_\_ shows the Earth as a flat picture. We can see continents and oceans.

4. Read and follow the instructions:

Our **continent** is EUROPE. Colour Europe green.

Our **country** is SPAIN. Circle Spain.

Our **city** is MADRID. Put a black circle in Madrid.



5. Match the words with the definitions.

1. It's a sphere. It shows the real shape of the Earth. It shows the position of the continents and oceans.

• Physical map

2. It shows countries, cities, regions and borders.

• World map

3. It shows the Earth as a flat picture.

• Globe

4. It shows the elements of the landscape, like rivers or mountains.

• Political map

6. Answer the questions:

• How many **continents** are there in our planet?

\_\_\_\_\_.

• What is our continent called?

\_\_\_\_\_.

• What **country** do you live in?

\_\_\_\_\_.

• What **Autonomous Community** do you live in?

\_\_\_\_\_.



7. Escribe el nombre de los continentes en los huecos correspondientes y los océanos en el mapa.

África	América del Norte	Asia	Europa
	América del Sur	Oceanía	Antártida

Océano Pacífico	Océano Atlántico	Océano Índico
Océano Ártico	Océano Antártico	

