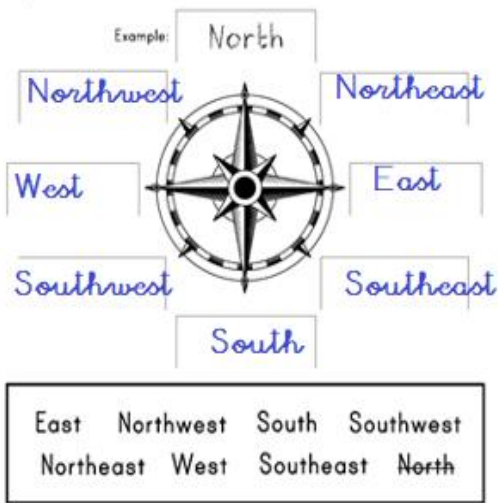
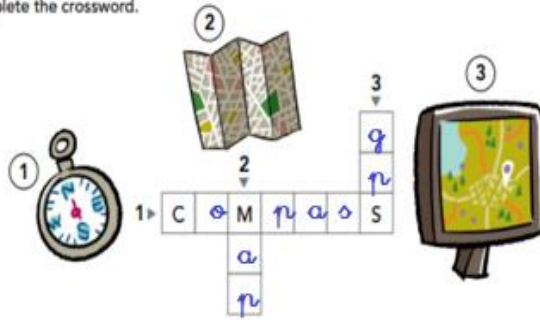


ANSWERS

1. Label the compass with the cardinal points:



Complete the crossword.

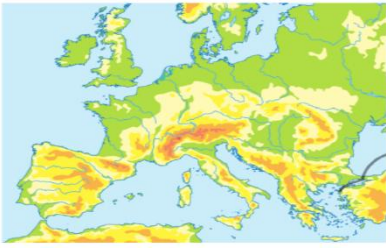


2. Answer to the questions:

- Which part of a plan do you use if you want to find out the meaning of the symbols?
The key
- Which part of a plan do you use to know the orientation of the map?
The compass rose
- What are the four cardinal points? North, South, East & West

3. Look at the maps and label:

WORLD MAP	PHYSICAL MAP	POLITICAL MAP
-----------	--------------	---------------



Physical map



Political map



World map

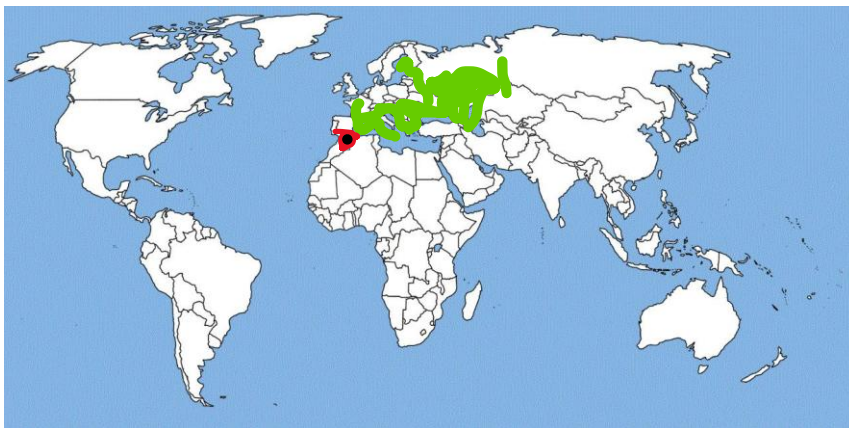
1. A physical map shows natural features like rivers, mountains or lakes.
2. A political map shows borders, Autonomous communities or regions.
3. A world map shows the Earth as a flat picture. We can see continents and oceans.

4. Read and follow the instructions:

Our **continent** is EUROPE. Colour Europe green.

Our **country** is SPAIN. Colour Spain red.

Our **city** is MADRID. Put a black circle in Madrid



5. Match the words with the definitions.

1. It's a sphere. It shows the real shape of the Earth. It shows the position of the continents and oceans.

2. It shows countries, cities, regions and borders.

3. It shows the Earth as a flat picture.

4. It shows the elements of the landscape, like rivers or mountains.

• Physical map

• World map

• Globe

• Political map

6. Answer the questions:

- How many **continents** are there in our planet?

There are seven continents.

- What is our continent called?

Our continent is called Europe.

- What **country** do you live in?

I live in Spain.

- What **Autonomous Community** do you live in?

I live in Madrid.



7. Escribe el nombre de los continentes en los huecos correspondientes y los océanos en el mapa.

África	América del Norte	Asia	Europa
	América del Sur	Oceanía	Antártida

Océano Pacífico	Océano Atlántico	Océano Índico
Océano Ártico	Océano Antártico	

